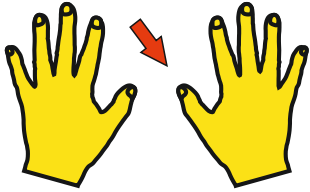
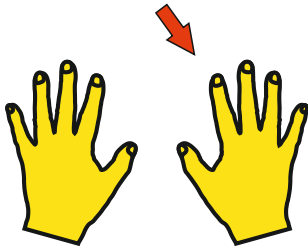


Name: _____

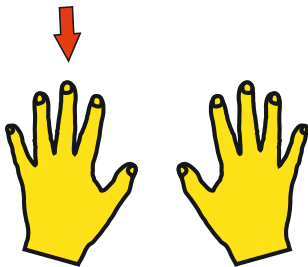
2er Einmaleins




3er Einmaleins



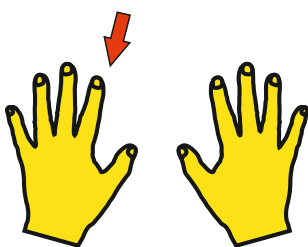
4er Einmaleins



2er Einmaleins



3er Einmaleins



$$2 \cdot 6 = 12$$

--	--	--	--	--	--

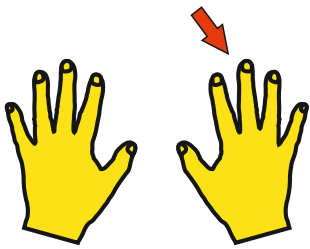
--	--	--	--	--	--

--	--	--	--	--	--

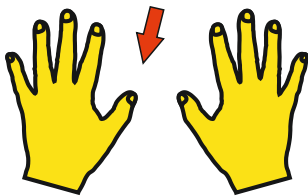
--	--	--	--	--	--

Name: _____

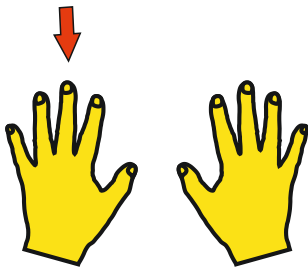
4er Einmaleins



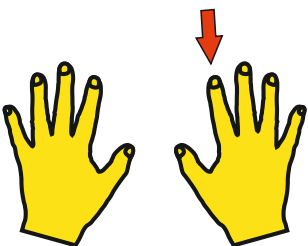
3er Einmaleins



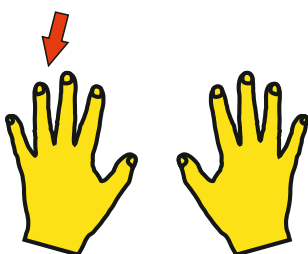
2er Einmaleins



4er Einmaleins



4er Einmaleins



$$8 \cdot 4 = 32$$

--	--	--	--	--	--


--	--	--	--	--	--

--	--	--	--	--	--

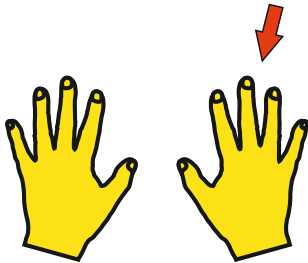
--	--	--	--	--	--

Name: _____

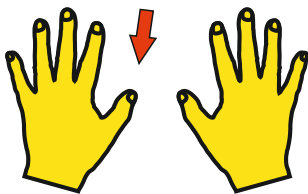
2er Einmaleins



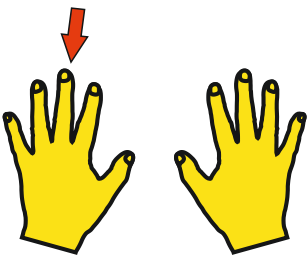
3er Einmaleins



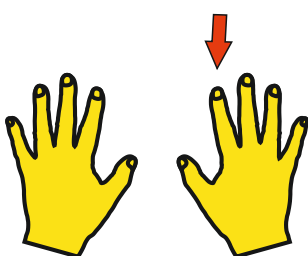
4er Einmaleins



5er Einmaleins



2er Einmaleins



$$4 \cdot 2 = \square \square$$

--	--	--	--	--	--

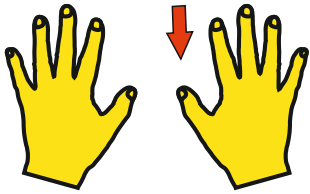
--	--	--	--	--	--

--	--	--	--	--	--


--	--	--	--	--	--

Name: _____

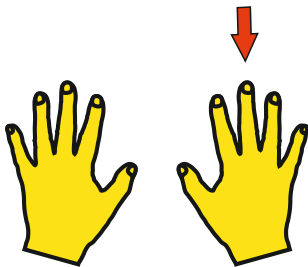
3er Einmaleins



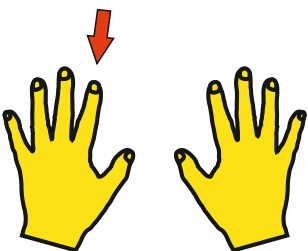
4er Einmaleins



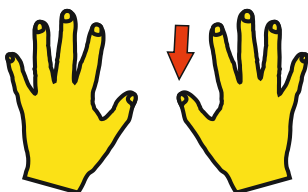
5er Einmaleins



4er Einmaleins



5er Einmaleins



$$6 \cdot 3 = \square \square$$

--	--	--	--	--	--


--	--	--	--	--	--

--	--	--	--	--	--


--	--	--	--	--	--

Name: _____

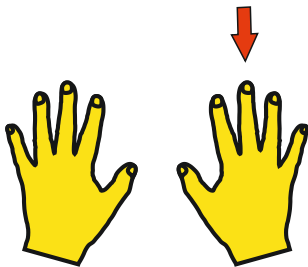
2er Einmaleins



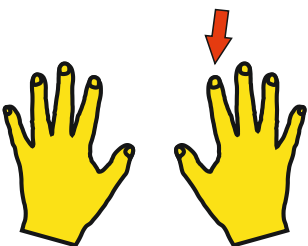
3er Einmaleins



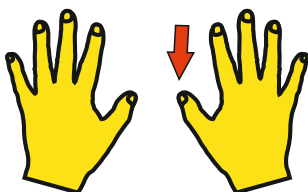
4er Einmaleins



5er Einmaleins



4er Einmaleins



$$10 \cdot 2 = \square \square$$

--	--	--	--	--	--

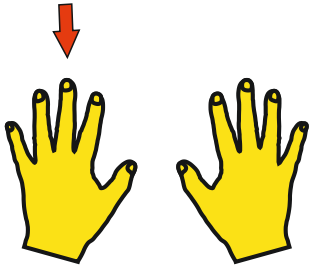
--	--	--	--	--	--

--	--	--	--	--	--

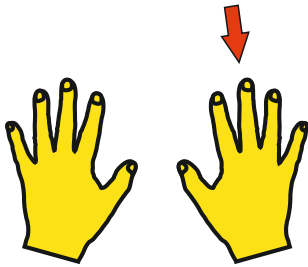
--	--	--	--	--	--

Name: _____

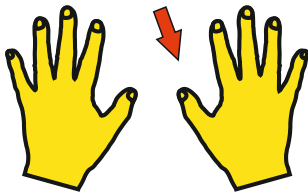
3er Einmaleins




2er Einmaleins




4er Einmaleins



5er Einmaleins



6er Einmaleins



$$3 \cdot 3 = \square \square$$

--	--	--	--	--	--

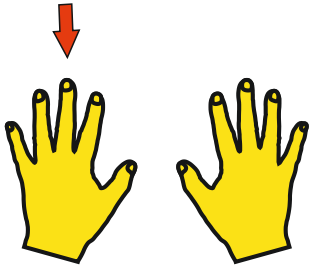
--	--	--	--	--	--

--	--	--	--	--	--

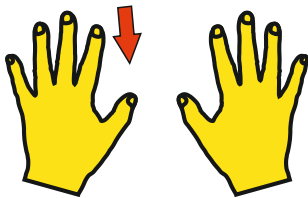
--	--	--	--	--	--

Name: _____

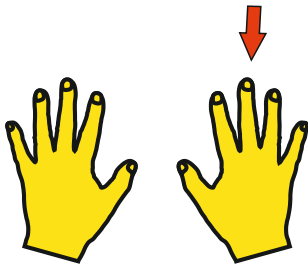
6er Einmaleins



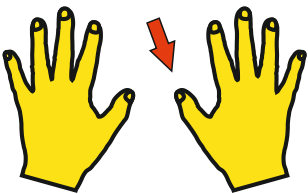
5er Einmaleins




4er Einmaleins



3er Einmaleins



2er Einmaleins



$$3 \cdot 6 = \square \square$$

--	--	--	--	--	--

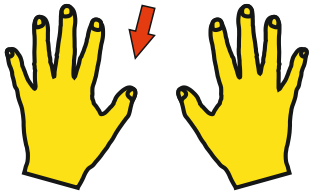
--	--	--	--	--	--

--	--	--	--	--	--

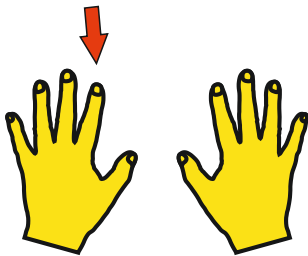
--	--	--	--	--	--

Name: _____

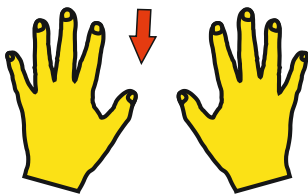
2er Einmaleins



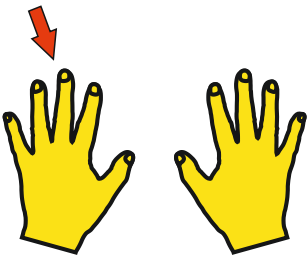
3er Einmaleins



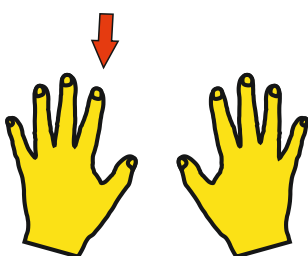
4er Einmaleins



5er Einmaleins



6er Einmaleins



$$5 \cdot 2 = \square \square$$

--	--	--	--	--	--

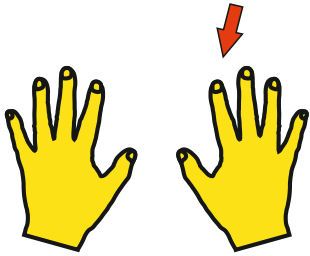
--	--	--	--	--	--

--	--	--	--	--	--

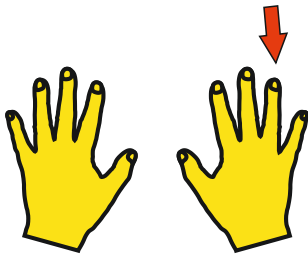
--	--	--	--	--	--

Name: _____

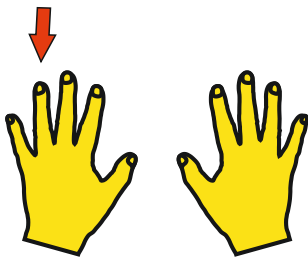
7er Einmaleins




7er Einmaleins




6er Einmaleins



5er Einmaleins



4er Einmaleins



$$7 \cdot 7 = \square \square$$

--	--	--	--	--	--

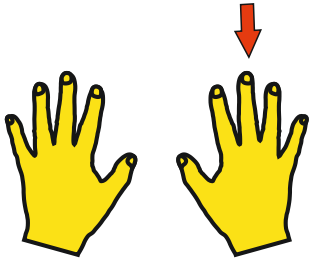
--	--	--	--	--	--

--	--	--	--	--	--

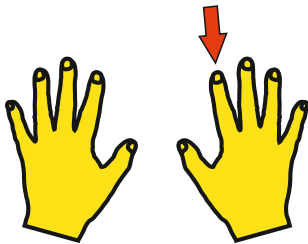
--	--	--	--	--	--

Name: _____


3er Einmaleins



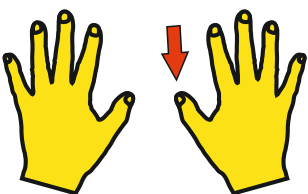
2er Einmaleins



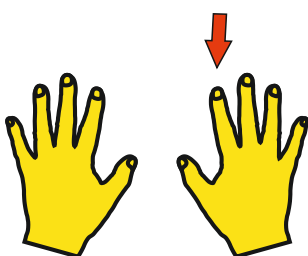
3er Einmaleins



4er Einmaleins



5er Einmaleins



$$8 \cdot 3 = \square \square$$

--	--	--	--	--	--

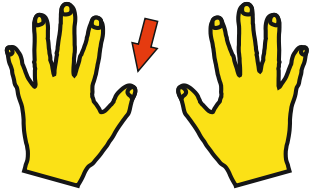
--	--	--	--	--	--

--	--	--	--	--	--


--	--	--	--	--	--

Name: _____

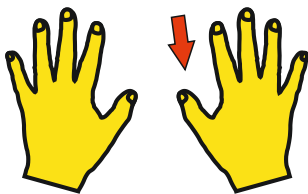
6er Einmaleins



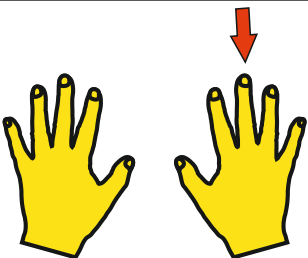
7er Einmaleins




6er Einmaleins



5er Einmaleins



7er Einmaleins



$$5 \cdot 6 = \square \square$$

--	--	--	--	--	--

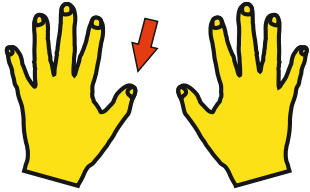
--	--	--	--	--	--

--	--	--	--	--	--

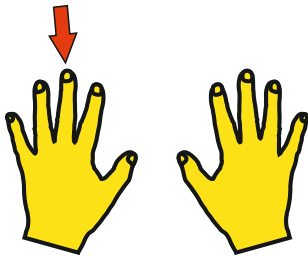
--	--	--	--	--	--

Name: _____

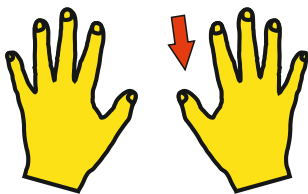
8er Einmaleins



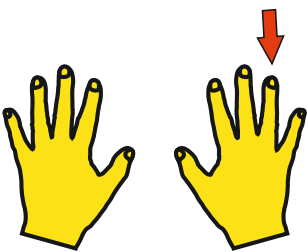
2er Einmaleins



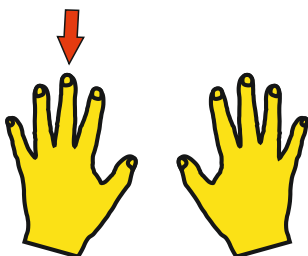
7er Einmaleins



4er Einmaleins



6er Einmaleins



$$5 \cdot 8 = \square \square$$

--	--	--	--	--	--

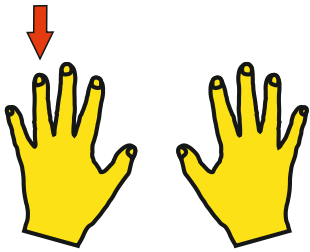
--	--	--	--	--	--

--	--	--	--	--	--

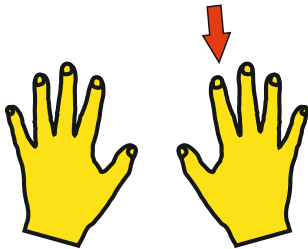
--	--	--	--	--	--

Name: _____


8er Einmaleins



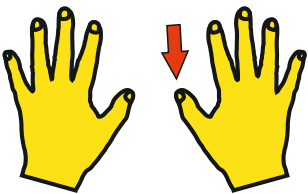
7er Einmaleins



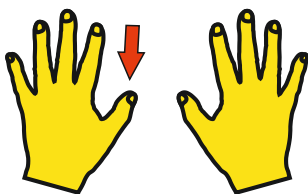
5er Einmaleins



8er Einmaleins



4er Einmaleins



$$2 \cdot 8 = \square \square$$

--	--	--	--	--	--

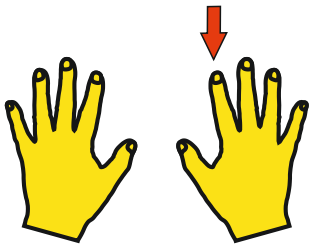
--	--	--	--	--	--

--	--	--	--	--	--

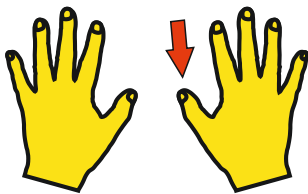
--	--	--	--	--	--

Name: _____

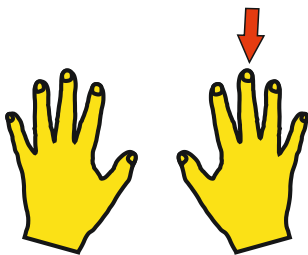
4er Einmaleins



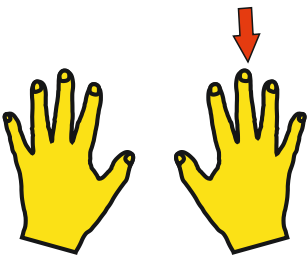
3er Einmaleins



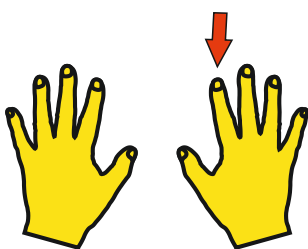
2er Einmaleins



5er Einmaleins



6er Einmaleins



$$7 \cdot 4 = \square \square$$

--	--	--	--	--	--

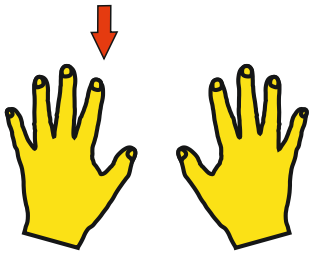
--	--	--	--	--	--

--	--	--	--	--	--


--	--	--	--	--	--

Name: _____

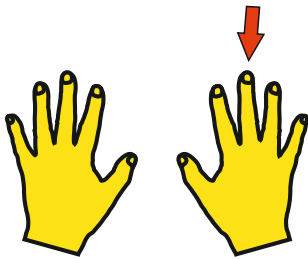
8er Einmaleins



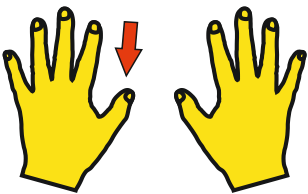
7er Einmaleins



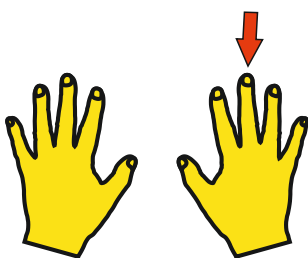
8er Einmaleins



3er Einmaleins



2er Einmaleins



$$4 \cdot 8 = \square \square$$

--	--	--	--	--	--

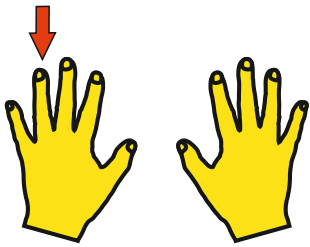
--	--	--	--	--	--

--	--	--	--	--	--

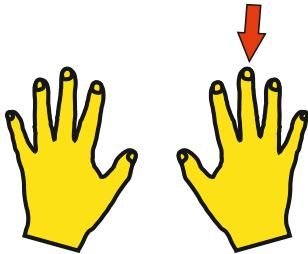
--	--	--	--	--	--

Name: _____

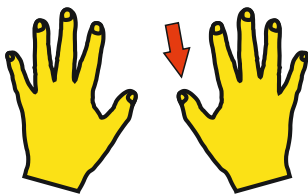
2er Einmaleins



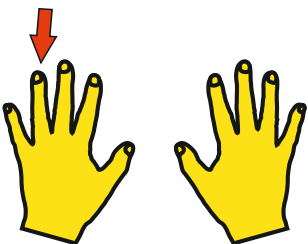
3er Einmaleins



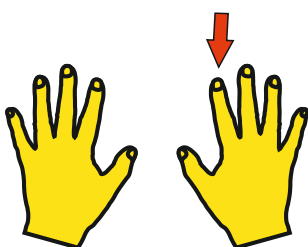
4er Einmaleins



5er Einmaleins



6er Einmaleins



$$2 \cdot 2 = \square \square$$

--	--	--	--	--	--

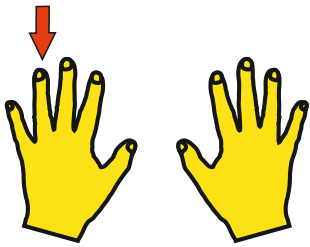
--	--	--	--	--	--

--	--	--	--	--	--

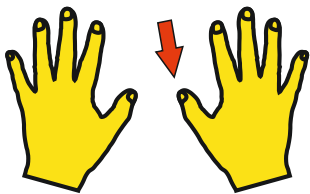
--	--	--	--	--	--

Name: _____

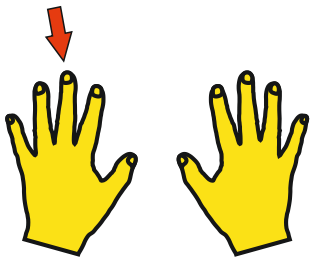
7er Einmaleins



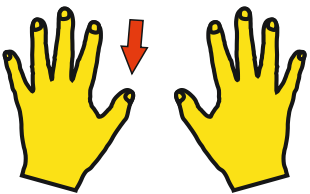
8er Einmaleins



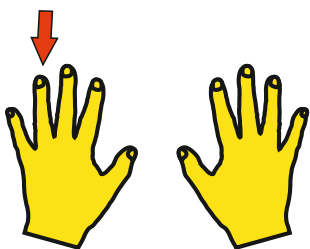
9er Einmaleins



9er Einmaleins



8er Einmaleins



$$2 \cdot 7 = \square \square$$

--	--	--	--	--	--

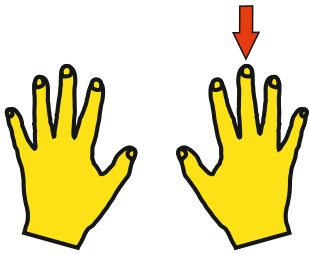
--	--	--	--	--	--

--	--	--	--	--	--

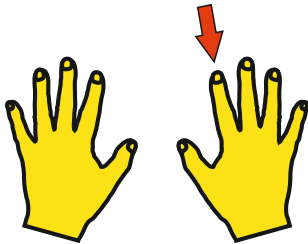
--	--	--	--	--	--

Name: _____

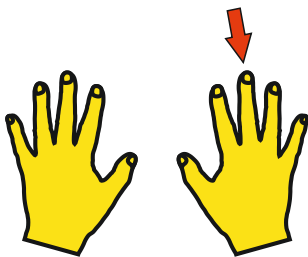
7er Einmaleins




6er Einmaleins



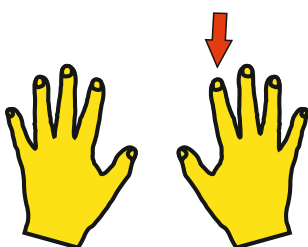
5er Einmaleins



4er Einmaleins



3er Einmaleins



$$8 \cdot 7 = \square \square$$

--	--	--	--	--	--

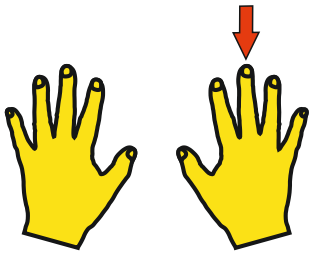
--	--	--	--	--	--

--	--	--	--	--	--

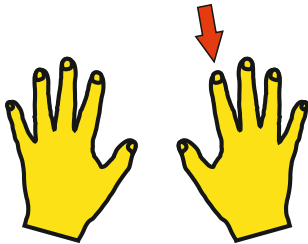
--	--	--	--	--	--

Name: _____

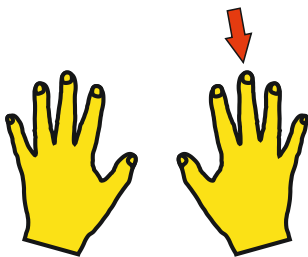
2er Einmaleins



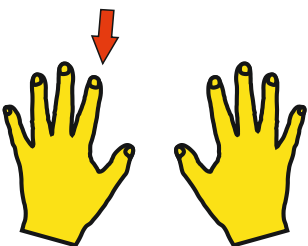
4er Einmaleins



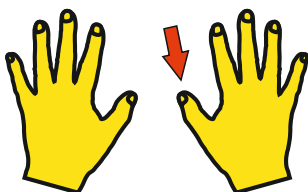
3er Einmaleins



9er Einmaleins



9er Einmaleins



8	·	2	=		
---	---	---	---	--	--

--	--	--	--	--	--

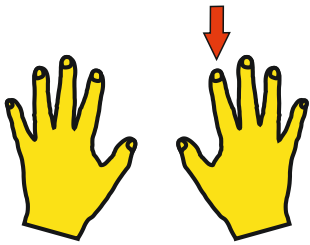
--	--	--	--	--	--

--	--	--	--	--	--

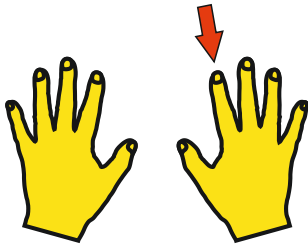
--	--	--	--	--	--

Name: _____

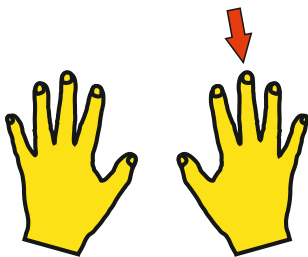
8er Einmaleins



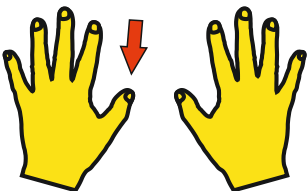
9er Einmaleins




6er Einmaleins



7er Einmaleins



8er Einmaleins



$$7 \cdot 8 = \square \square$$

--	--	--	--	--	--

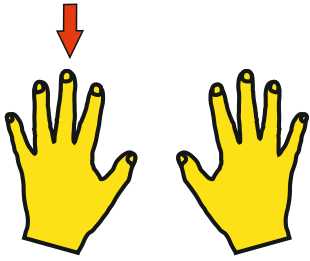
--	--	--	--	--	--

--	--	--	--	--	--

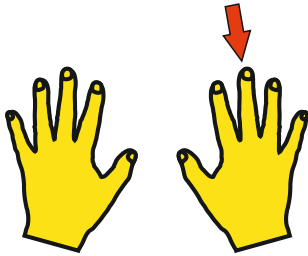
--	--	--	--	--	--

Name: _____

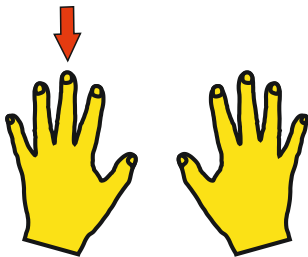
10er Einmaleins



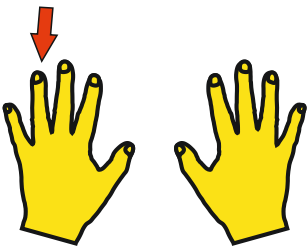
9er Einmaleins



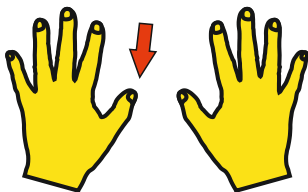
4er Einmaleins



6er Einmaleins



2er Einmaleins



$$3 \cdot 10 = \square \square$$

--	--	--	--	--	--

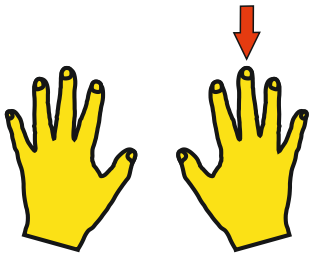
--	--	--	--	--	--

--	--	--	--	--	--

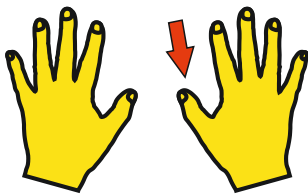
--	--	--	--	--	--

Name: _____

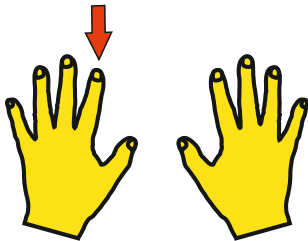
9er Einmaleins



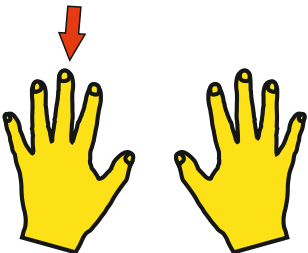
8er Einmaleins



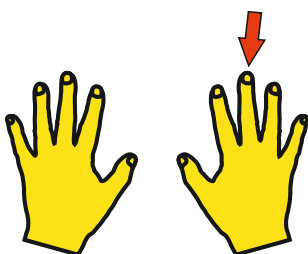
7er Einmaleins



6er Einmaleins



5er Einmaleins



$$8 \cdot 9 = \square \square$$

--	--	--	--	--	--

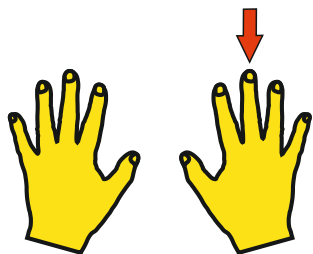
--	--	--	--	--	--

--	--	--	--	--	--

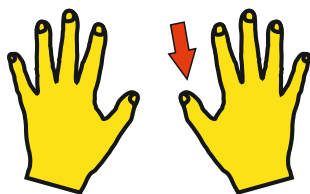
--	--	--	--	--	--

Name: _____

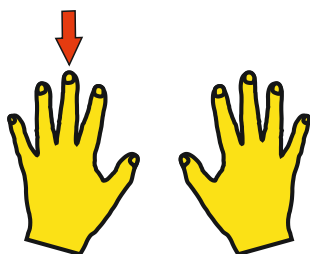
10er Einmaleins



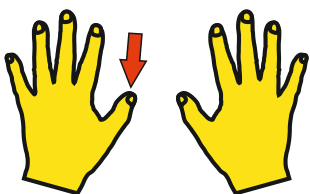
9er Einmaleins



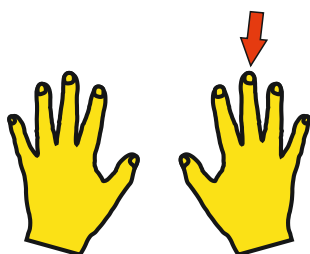
8er Einmaleins



7er Einmaleins



6er Einmaleins



$$8 \cdot 10 = \square \square$$

--	--	--	--	--	--


--	--	--	--	--	--

--	--	--	--	--	--

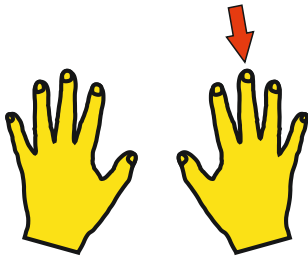
--	--	--	--	--	--

Name: _____

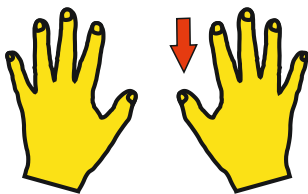
2er Einmaleins




3er Einmaleins



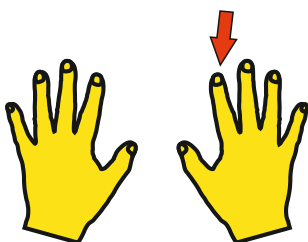
4er Einmaleins



10er Einmaleins



5er Einmaleins



$$9 \cdot 2 = \square \square$$

--	--	--	--	--	--

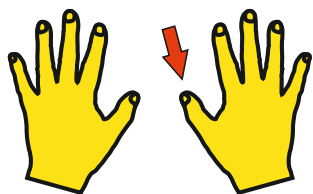
--	--	--	--	--	--

--	--	--	--	--	--

--	--	--	--	--	--

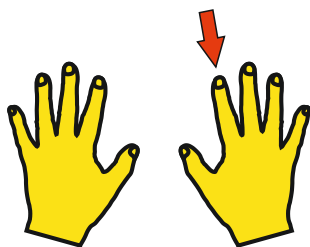
Name: _____

6er Einmaleins




$$6 \cdot 6 = \square \square$$

7er Einmaleins



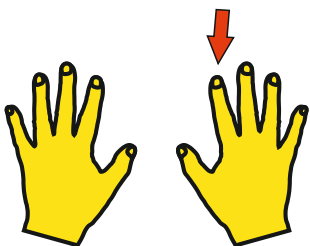
$$\square \square \square \square \square \square$$

8er Einmaleins



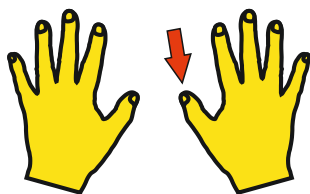
$$\square \square \square \square \square \square$$

9er Einmaleins



$$\square \square \square \square \square \square$$

10er Einmaleins



$$\square \square \square \square \square \square$$